



NAME _____

DATE _____

BUNDLE AND COUNT

Count the objects in bundles by using ones, tens and hundreds.

1) 188 to 510

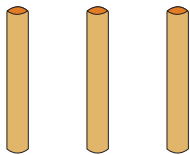
188, ____, 190, 200, 300, 400, 500, 510

Ones = ____

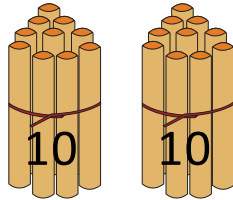
Tens = ____

Larger unit = ____.

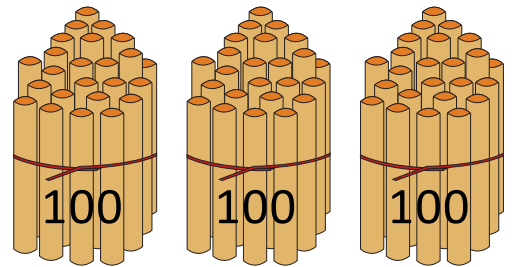
Hundreds = ____



Ones



Tens



Hundreds

2) 389 to 801

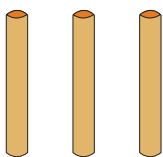
389, 390, 400, ____, 600, ____, 800, 801

Ones = ____

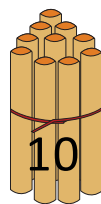
Tens = ____

Larger unit = ____.

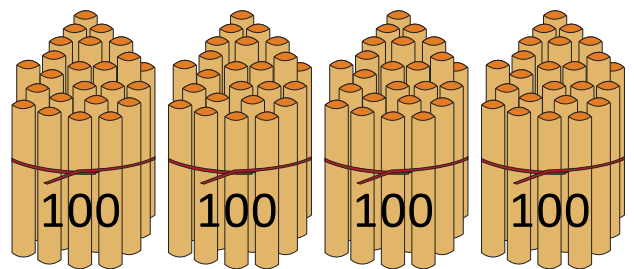
Hundreds = ____



Ones



Tens



Hundreds